

# ASSET<sup>EI</sup> Question-A-Day

Best of Luck





Class 9 | English

**Q** The table below contains some situations in column 1 and some corresponding sentences to suit the situation in the column 2. Choose the option that is **MISMATCHED**. (Use the underlined expression to connect the meaning of the sentences in column 1.)

| Options | 1. Situations  | 2. Response                                       |
|---------|--|---|
| A.      | The painting looked so beautiful.                                | I could not <u>take my eyes off</u> it.           |
| B.      | You don't want anyone else to see what is happening.             | See <u>which way the cat jumps</u> .              |
| C.      | She's good at noticing things around her.                        | She has <u>eyes in the back of her head</u> .     |
| D.      | You can see some sign of hope for the future in difficult times. | There's a <u>light at the end of the tunnel</u> . |

## Yesterday's Question | Class 9 | Social Studies

**Q** Which of these modern structures **MOST CLEARLY** shows the influence of Islamic architecture?



**Correct Answer : D**

To change your class/email, [click here](#). To change subject line of email, [click here](#).  
 You are receiving this email from Educational Initiatives because you registered for a product/service or subscribed to this service. To stop receiving this email, [click here](#).  
 Note: AQAD mails are not sent on Sundays  
 Problem in printing - [Click Here](#)

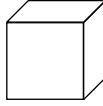
Join ASSET Ambassadors on Facebook - [Click Here](#)

# ASSET<sup>EI</sup> Question-A-Day

Best of Luck

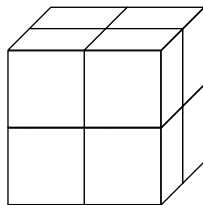
Class 9 | Maths

Q



The cube shown above has a volume of  $8 \text{ cm}^3$ . 8 such cubes were joined to form a larger cube shown here.

What will be the total surface area of this larger cube?



- A.  $16 \text{ cm}^2$
- B.  $24 \text{ cm}^2$
- C.  $64 \text{ cm}^2$
- D.  $96 \text{ cm}^2$

## Monday's Question | Class 9 | English

Q

The table below contains some situations in column 1 and some corresponding sentences to suit the situation in the column 2. Choose the option that is **MISMATCHED**. (Use the underlined expression to connect the meaning of the sentences in column 1.)

| Options | 1. Situations  | 2. Response                                       |
|---------|--|---|
| A.      | The painting looked so beautiful.                                | I could not <u>take my eyes off</u> it.           |
| B.      | You don't want anyone else to see what is happening.             | See <u>which way the cat jumps</u> .              |
| C.      | She's good at noticing things around her.                        | She has <u>eyes in the back of her head</u> .     |
| D.      | You can see some sign of hope for the future in difficult times. | There's a <u>light at the end of the tunnel</u> . |

**Correct Answer : B**

To change your class/email, [click here](#). To change subject line of email, [click here](#).  
 You are receiving this email from Educational Initiatives because you registered for a product/service or subscribed to this service. To stop receiving this email, [click here](#).  
 Note: AQAD mails are not sent on Sundays  
 Problem in printing - [Click Here](#)

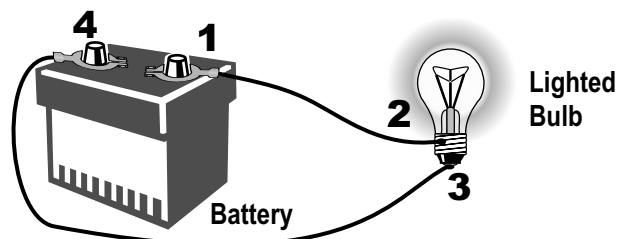
Join ASSET Ambassadors on Facebook - [Click Here](#)

# ASSET<sup>EI</sup> Question-A-Day

Best of Luck

Class 9 | Science

**Q** A battery is connected by wires to a bulb as shown below, and the bulb glows.



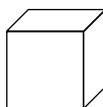
Through which points does charge flow?

- A. 1-2-3-4-1. Charge flows through the battery and bulb also.
- B. 1-2-3-4. Charge flows through the wires and the bulb only.
- C. 3-4-1-2. Charge flows through the wires and the battery only.
- D. There is no flow of charge in the circuit.

---

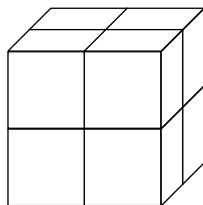
## Tuesday's Question | Class 9 | Maths

**Q**



The cube shown above has a volume of  $8 \text{ cm}^3$ . 8 such cubes were joined to form a larger cube shown here.

What will be the total surface area of this larger cube?



- A.  $16 \text{ cm}^2$
- B.  $24 \text{ cm}^2$
- C.  $64 \text{ cm}^2$
- D.  $96 \text{ cm}^2$

**Correct Answer : D**

To change your class/email, [click here](#). To change subject line of email, [click here](#).  
You are receiving this email from Educational Initiatives because you registered for a product/service or subscribed to this service. To stop receiving this email, [click here](#).  
Note: AQAD mails are not sent on Sundays  
Problem in printing - [Click Here](#)

Join ASSET Ambassadors on Facebook - [Click Here](#)

# ASSET<sup>EI</sup> Question-A-Day

Best of Luck

Class 9 | Social Studies

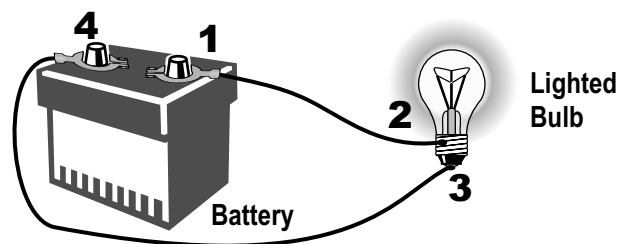
**Q** A major contribution of the British rule in India was the removal of certain age old barbaric customs existing in Indian society. One such custom was 'head hunting', which was commonplace in the tribal conflicts of an Indian state. Identify this state, which touches the border of Myanmar.

- A. West Bengal
- B. Sikkim
- C. Nagaland
- D. Bihar

---

Wednesday's Question | Class 9 | Science

**Q** A battery is connected by wires to a bulb as shown below, and the bulb glows.



Through which points does charge flow?

- A. 1-2-3-4-1. Charge flows through the battery and bulb also.
- B. 1-2-3-4. Charge flows through the wires and the bulb only.
- C. 3-4-1-2. Charge flows through the wires and the battery only.
- D. There is no flow of charge in the circuit.

**Correct Answer : A**

To change your class/email, [click here](#). To change subject line of email, [click here](#).  
You are receiving this email from Educational Initiatives because you registered for a product/service or subscribed to this service. To stop receiving this email, [click here](#).  
Note: AQAD mails are not sent on Sundays  
Problem in printing - [Click Here](#)

Join ASSET Ambassadors on Facebook - [Click Here](#)